



## *Where's Walrus?* Learning Latitude and Longitude



1) 81 South, 90 West

11) 72 South, 120 East

2) 10 South, 90 West

12) 30 North, 90 West

3) 50 North, 58 East

13) 75 North, 60 West

4) 80 North, 150 East

14) 40 North, 180 degrees

5) 85 North, 120 West

15) 65 North, 60 West

6) 10 North, 180 degrees

16) 45 North, 120 East

7) Tropic of Cancer, 30 East

17) 72 South, 150 West

8) 40 South, 125 East

18) Arctic Circle, Prime Meridian


9) 55 North, 135 East

19) Antarctic Circle, 30 West

10) Arctic Circle, 150 West

20) 60 South, 90 East






## Where's Walrus?

### Learning Latitude and Longitude

#### Answer Key



1) 81 South, 90 West

Weddell seal



11) 72 South, 120 East

Leopard seal

2) 10 South, 90 West

Galapagos Fur seal

12) 30 North, 90 West

California sea lion

3) 50 North, 58 East

Caspian seal

13) 75 North, 60 West

Bearded seal

4) 80 North, 150 East

Larga seal

14) 40 North, 180 degrees

Northern Elephant seal

5) 85 North, 120 West

Walrus

15) 65 North, 60 West

Harp seal

6) 10 North, 180 degrees

Hawaiian monk seal

16) 45 North, 120 East

Baikal seal

7) Tropic of Cancer, 30 East

Mediterranean monk seal

17) 72 South, 150 West

Ross seal

8) 40 South, 125 East

Australian fur seal

18) Arctic Circle, Prime Meridian

Harbor seal

9) 55 North, 135 East

Ribbon seal

19) Antarctic Circle, 30 West

Antarctic fur seal

10) Arctic Circle, 150 West

Steller sea lion

20) 60 South, 90 East

Subantarctic fur seal

